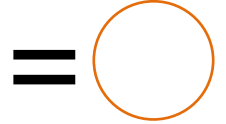


Minus

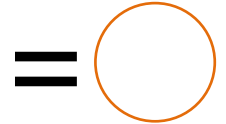
Løs regnestykkerne



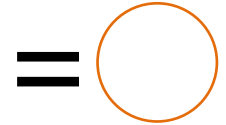
$4 - 2$



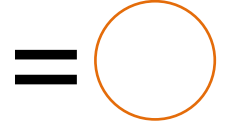
$5 - 3$



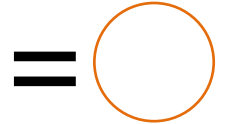
$9 - 3$



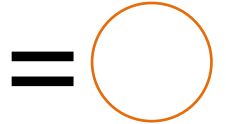
$7 - 5$



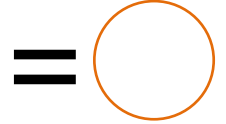
$8 - 4$



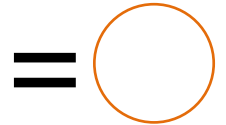
$6 - 1$



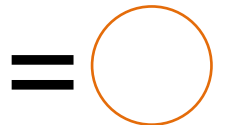
$4 - 3$



$7 - 2$



$10 - 7$



$10 - 2$

